

Nom de l'élève :

Prénom :

Temps :

II1


 $5 < 7$     $4 > 2$     $3 = 3$     $2 \neq 1$ 

 $7 \dots 10$     $19 \dots 9$     $95 \dots 57$     $32 \dots 32$     $501 \dots 498$ 

. /5

II2



$$\begin{array}{r} 15 \\ + 4 \\ \hline \dots \end{array}$$

$$\begin{array}{r} 37 \\ + 12 \\ \hline \dots \end{array}$$

$$\begin{array}{r} 88 \\ + 2 \\ \hline \dots \end{array}$$

$$\begin{array}{r} 46 \\ + 87 \\ \hline \dots \end{array}$$

$$\begin{array}{r} 500 \\ + 79 \\ \hline \dots \end{array}$$

. /5

II3



$$\begin{array}{r} 16 \\ - 6 \\ \hline \dots \end{array}$$

$$\begin{array}{r} 35 \\ - 7 \\ \hline \dots \end{array}$$

$$\begin{array}{r} 27 \\ - 19 \\ \hline \dots \end{array}$$

$$\begin{array}{r} 398 \\ - 58 \\ \hline \dots \end{array}$$

$$\begin{array}{r} 127 \\ - 69 \\ \hline \dots \end{array}$$

. /5

II4



$$\begin{array}{r} 8 \\ \times 5 \\ \hline \dots \end{array}$$

$$\begin{array}{r} 7 \\ \times 9 \\ \hline \dots \end{array}$$

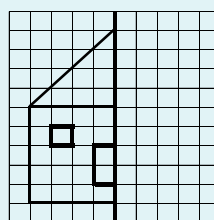
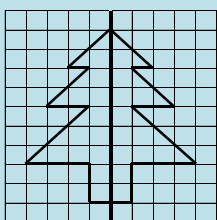
$$\begin{array}{r} 63 \\ \times 4 \\ \hline \dots \end{array}$$

$$\begin{array}{r} 78 \\ \times 96 \\ \hline \dots \\ \dots \\ \dots \end{array}$$

$$\begin{array}{r} 123 \\ \times 45 \\ \hline \dots \\ \dots \\ \dots \end{array}$$

. /5

II5

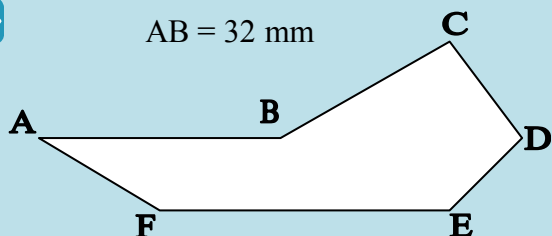


. /5

II6



AB = 32 mm



BC = ..... mm

CD = ..... mm

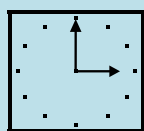
DE = ..... mm

EF = ..... mm

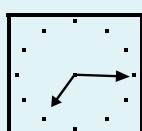
FA = ..... mm

. /5

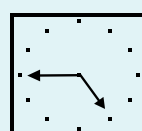
II7



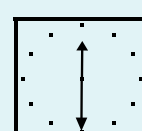
3h00 ou 15h00



...h.... ou ...h....



...h.... ou ...h....



... h ...

. /5